


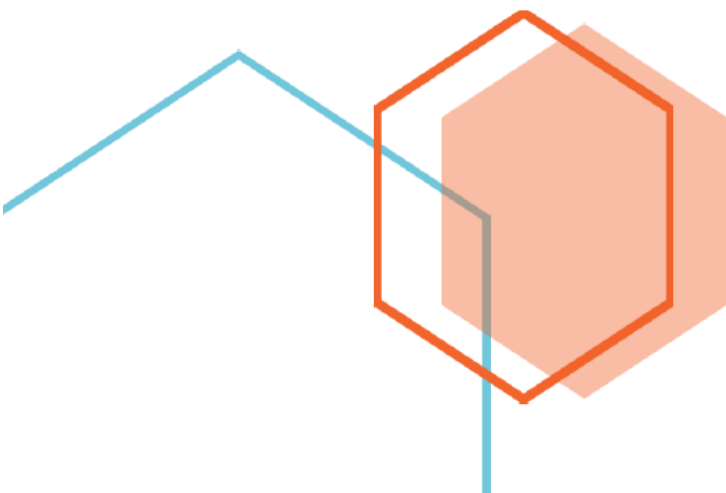


First Edition

# Time & Clock Questions - Grade 2 Part 4



*Fun and challenging math questions for young students*



# Time & Clock Questions - Grade 2 Part 4

Thank you for purchasing **MathJump! Like a Kangaroo**. Please register online: <https://www.homesweetlearning.com/app/home?fr=ebk> where we have a much larger collection of practice questions with similar levels of difficulty as other math contest problems such as Math Kangaroo, MathCounts, etc. You will also get notification whenever new questions are created.

There is also the **MathJump! Weekly Quiz** - an online math quiz held weekly for students of grades 1-4. The difficulty level of the weekly quiz questions are equivalent to Part B and Part C questions in the annual Math Kangaroo contest. Participating in MathJump! Weekly Quiz will help the parents track their child's progress with the score report and performance ranking, and will help students get better scores for different math contests.

Or you can get individualized help from our math tutors. **MathJump! Like a Kangaroo Intensive Test Prep** is an intensive teacher-led group or one-on-one training program to prepare students for taking math contests. The one-on-one option of this class has flexible schedule and content as requested by the students; the group class consists of 2-5 students (maximum 5 students) and meets once a week at a fixed time. Taking this class will improve the students' problem solving skills as well as knowledge in basic math concepts such as number sense, numeration, measurement, geometry, spatial sense, patterning, algebra, data management, probability, etc.

Please note that we are not affiliated with the Math Kangaroo Contest organizers. But doing our practice questions, taking our weekly quizzes, or taking lessons from our tutors will definitely help your child get better scores in Math Kangaroo Contest and other math contests.

Homesweet Learning Math Program Team



FUN  
CHALLENGING  
MATH  
PROBLEMS  
FOR  
YOUNG  
LEARNERS

## Time & Clock Questions - Grade 2 Part 4

### Question 1

There are four sections of the garden. The first section took 15 minutes to weed, the second section took half an hour to water, the third section took 25 minutes to prune, and the fourth section took 10 minutes to sweep. Sarah started working on the first section at 2:30 PM. At what time did she finish taking care of the entire garden?

### Question 2

If buses arrive every 30 minutes and the first bus arrived at 7:00 AM, what time will the next bus arrive?

### Question 3

A bus stopped at this bus stop at ten past six in the morning to drop off passengers and packages. It then left the bus stop at twenty to seven in the morning. How long did it stop?

### Question 4


The playground was open for 120 minutes and closed at 3:45. When was it opened?

### Question 5

If Miguelito took 45 minutes to get all the customers' body measurements and finished measuring at 4:15 PM, what time did he start measuring?

### Question 6

A plane usually leave the airport at




am and flies for 1 hour 55 minutes to another city. However, the plane left the airport 5 minutes later than the scheduled time. When will the plane arrive at the other city?

- A: 11:30pm the next day    B: 12:30pm    C: 11:15pm the previous day    D: 06:25pm    E: 02:45pm the next day

### Question 7

Mr. Davies scheduled his meeting with his client at



am . If his client came 50 minutes before the scheduled time and Mr. Davies came to his office late due to some traffic at



am but started the meeting with his client right after he arrived, how long did the client wait for the meeting?

A: 11 hours 8  
minutes

B: 15 hours 24  
minutes

C: 1 hour 25  
minutes

D: 8 hours 52  
minutes

E: 22 hours 46  
minutes

## Answer Keys for Time & Clock Questions - Grade 2 Part 4

Question 1: 3:50 PM

Question 2: 7:30 AM

Question 3: 30 minutes

Question 4: The playground was opened at 1:45.

Question 5: 3:30 PM

Question 6: B

Question 7: C