


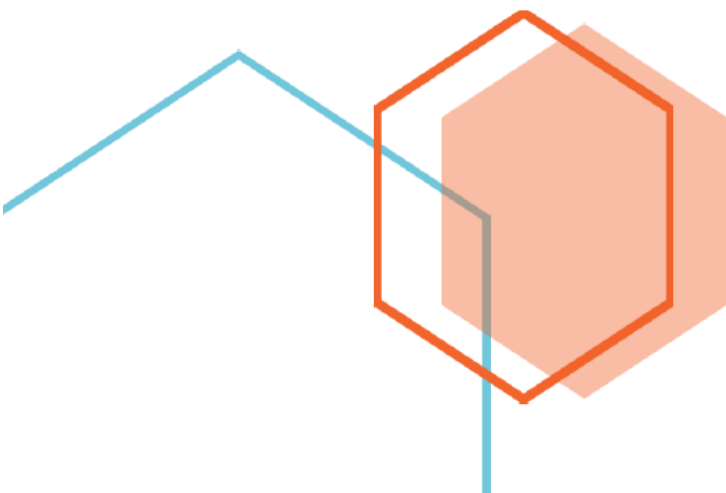


First Edition

Time and Clock (Half Hour) Word Problems Grade Two Part 1



Fun and challenging math questions for young students



Time and Clock (Half Hour) Word Problems Grade Two Part 1

Thank you for purchasing **MathJump! Like a Kangaroo**. Please register online: <https://www.homesweetlearning.com/app/home?fr=ebk> where we have a much larger collection of practice questions with similar levels of difficulty as other math contest problems such as Math Kangaroo, MathCounts, etc. You will also get notification whenever new questions are created.

There is also the **MathJump! Weekly Quiz** - an online math quiz held weekly for students of grades 1-4. The difficulty level of the weekly quiz questions are equivalent to Part B and Part C questions in the annual Math Kangaroo contest. Participating in MathJump! Weekly Quiz will help the parents track their child's progress with the score report and performance ranking, and will help students get better scores for different math contests.

Or you can get individualized help from our math tutors. **MathJump! Like a Kangaroo Intensive Test Prep** is an intensive teacher-led group or one-on-one training program to prepare students for taking math contests. The one-on-one option of this class has flexible schedule and content as requested by the students; the group class consists of 2-5 students (maximum 5 students) and meets once a week at a fixed time. Taking this class will improve the students' problem solving skills as well as knowledge in basic math concepts such as number sense, numeration, measurement, geometry, spatial sense, patterning, algebra, data management, probability, etc.

Please note that we are not affiliated with the Math Kangaroo Contest organizers. But doing our practice questions, taking our weekly quizzes, or taking lessons from our tutors will definitely help your child get better scores in Math Kangaroo Contest and other math contests.

Homesweet Learning Math Program Team

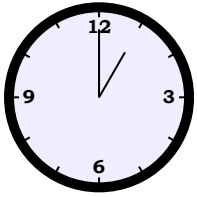


FUN
CHALLENGING
MATH
PROBLEMS
FOR
YOUNG
LEARNERS

Time and Clock (Half Hour) Word Problems Grade Two Part 1

Question 1

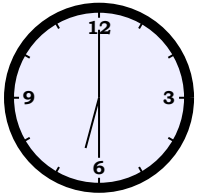
School ends at



pm . The school allows another 1 hour 30 minutes for cleaning the facilities before it closes. When does the school close?

Question 2

It usually takes 30 minutes to grill a steak before it is served to the customer. If a customer orders a steak at



pm , when can the customer expect to receive the order?

Question 3

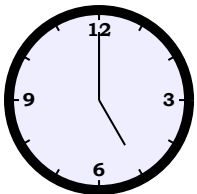
Ruby starts her work at



pm . She stays at work for 3 hours . When will Ruby leave?

Question 4

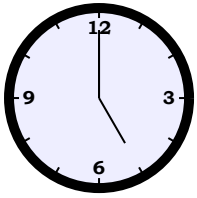
The dolphins do performances every 1 hour 30 minutes. They did one show at



pm . At what time is the next dolphin show?

Question 5

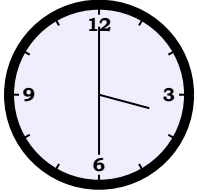
Children can pat giraffes at the giraffes exhibit every Saturday at



pm in the zoo. The patting session will usually last for 2 hours 30 minutes. When is the patting session finished?

Question 6

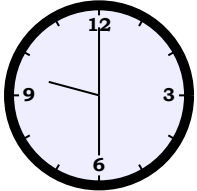
On Sunday, John used 2 hours 30 minutes to clean his room starting from



pm . When was John done cleaning up his room?

Question 7

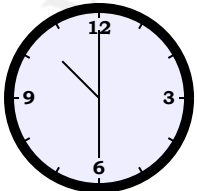
Today, Allen woke up 30 minutes later than usual. He usually wakes up at



am in the morning. What time did he wake up today?

Question 8

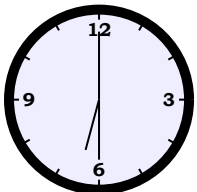
Alice finished her homework 30 minutes later than usual. She usually finishes her homework at



am . What time did she finish her homework today?

Question 9

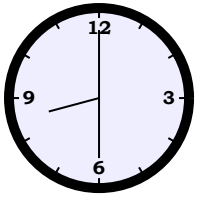
The Johnson family arrived at the farm at



am . They got their tools right after arriving at the farm. After 30 minutes, they started plowing the soil. What time did they start plowing the soil?

Question 10

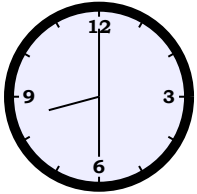
Buses came to the station every 30 minutes. The first bus arrived at



am . At what time will the next bus arrive?

Question 11

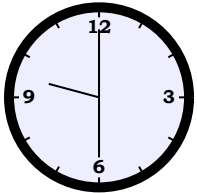
A celebration party of 2 hours 30 minutes started at



am . At what time did the celebration party end?

Question 12

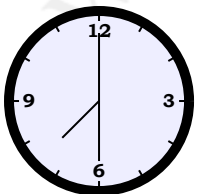
After the birthday party closed at



am , Alice stayed behind to clean up. It took her 3 hours to clean up. When did Alice leave?

Question 13


Mrs. Johnson called at



am and said she could not come back home until 30 minutes later. When would (Mrs.) Johnson be back?

Question 14

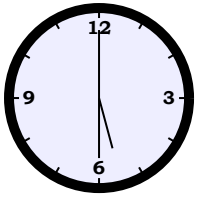
It took Clara 30 minutes to get her home from Mrs. Patel's home. She left Mrs. Patel's home at



am . At what time did Clara get home?

Question 15

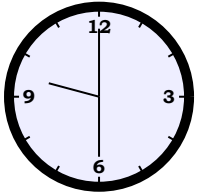
Customers came to the tailor's store to place orders for their uniforms. The tailor started measuring at



am and took 30 minutes to get all their body measurements. When did the tailor finish measuring?

Question 16

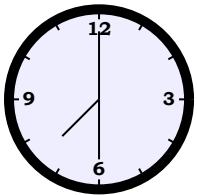
Nancy the tailor took 30 minutes to complete making one shirt. If Nancy started sewing another shirt at



am, at what time would she finish that shirt?

Question 17

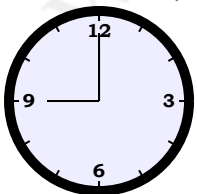
Each class is scheduled for 3 hours. If the first class starts at



am, what time would the second class start?

Question 18

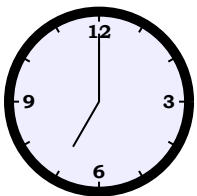
The museum opens at



am for 2 hours 30 minutes. When does the museum close?

Question 19

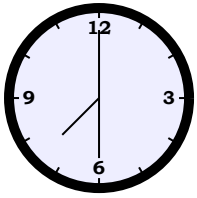
Paul invited some guests to visit his new home. His guests were at his house at



am and stayed for 1 hour 30 minutes. When did the guests leave?

Question 20

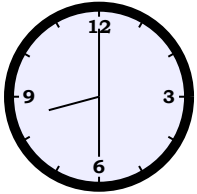
The workers took 3 hours to load all the fruits onto the truck. They started at



am , when did they finish the work?

Question 21

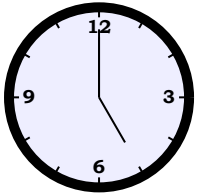
Allen usually spends 30 minutes to review his class notes to prepare for his final exam. If Allen started reviewing at



am , when would he finish reviewing?

Question 22

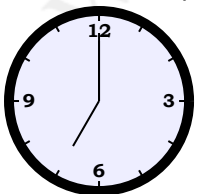
Sam finished his exam 30 minutes earlier than the scheduled end-time for the exam, which started at



am for 30 minutes. When did Sam finish the exam?

Question 23

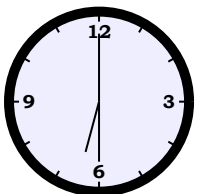
Daniel's sister spent 3 hours washing her clothes, starting at



am . When did she finish washing the clothes?

Question 24

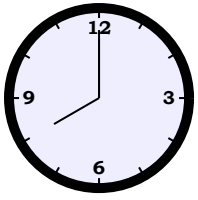
Sam left school at



am . It took Sam 1 hour to arrive at the theme park. The gatekeeper checked their tickets for 1 hour . At what time did Sam come to the theme park?

Question 25

Janet and her brother started cleaning their bedrooms at



am . Janet took 1 hour to clean her room, and her brother took 1 hour . At what time did Janet's brother finish cleaning his room?

Answer Keys for Time and Clock (Half Hour) Word Problems Grade Two Part 1

Question 1: 02:30pm
Question 2: 07:00pm
Question 3: 07:00pm
Question 4: 06:30pm
Question 5: 07:30pm
Question 6: 06:00pm
Question 7: 10:00am
Question 8: 11:00am
Question 9: 07:00am
Question 10: 09:00am
Question 11: 11:00am
Question 12: 12:30pm
Question 13: 08:00am
Question 14: 11:00am
Question 15: 06:00am
Question 16: 10:00am
Question 17: 10:30am
Question 18: 11:30am
Question 19: 08:30am
Question 20: 10:30am
Question 21: 09:00am
Question 22: 05:30am
Question 23: 10:00am
Question 24: 07:30am
Question 25: 09:00am