


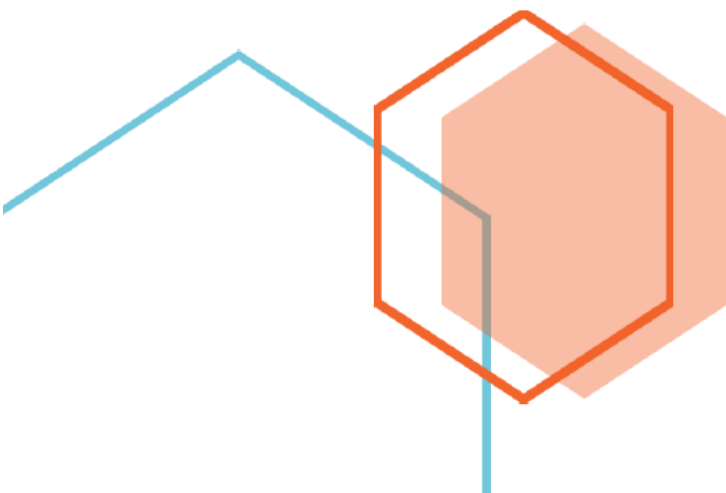


First Edition

Time and Clock (Half Hour) Word Problems Grade Two Part 2



Fun and challenging math questions for young students



Time and Clock (Half Hour) Word Problems Grade Two Part 2

Thank you for purchasing **MathJump! Like a Kangaroo**. Please register online: <https://www.homesweetlearning.com/app/home?fr=ebk> where we have a much larger collection of practice questions with similar levels of difficulty as other math contest problems such as Math Kangaroo, MathCounts, etc. You will also get notification whenever new questions are created.

There is also the **MathJump! Weekly Quiz** - an online math quiz held weekly for students of grades 1-4. The difficulty level of the weekly quiz questions are equivalent to Part B and Part C questions in the annual Math Kangaroo contest. Participating in MathJump! Weekly Quiz will help the parents track their child's progress with the score report and performance ranking, and will help students get better scores for different math contests.

Or you can get individualized help from our math tutors. **MathJump! Like a Kangaroo Intensive Test Prep** is an intensive teacher-led group or one-on-one training program to prepare students for taking math contests. The one-on-one option of this class has flexible schedule and content as requested by the students; the group class consists of 2-5 students (maximum 5 students) and meets once a week at a fixed time. Taking this class will improve the students' problem solving skills as well as knowledge in basic math concepts such as number sense, numeration, measurement, geometry, spatial sense, patterning, algebra, data management, probability, etc.

Please note that we are not affiliated with the Math Kangaroo Contest organizers. But doing our practice questions, taking our weekly quizzes, or taking lessons from our tutors will definitely help your child get better scores in Math Kangaroo Contest and other math contests.

Homesweet Learning Math Program Team

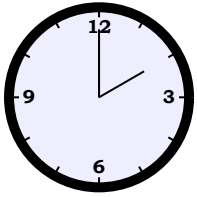


FUN
CHALLENGING
MATH
PROBLEMS
FOR
YOUNG
LEARNERS

Time and Clock (Half Hour) Word Problems Grade Two Part 2

Question 1

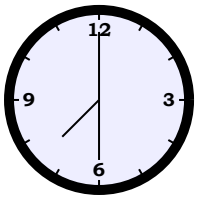
Today, Daniel woke up 3 hours earlier than usual. He usually wakes up at



pm in the morning. What time did he wake up today?

Question 2

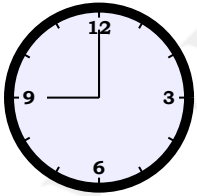
Jack finished his homework 1 hour 30 minutes earlier than usual. He usually finishes his homework at



am . What time did he finish his homework today?

Question 3

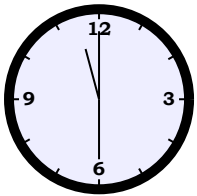
A ship arrived at the harbor at



am after a delay of 2 hours 30 minutes. When did the ship leave?

Question 4

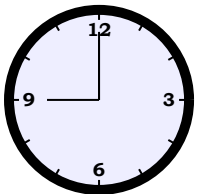
Alice went to the movie theatre. She arrived 30 minutes before the movie theatre was scheduled to open at



am . When did Alice arrive at the movie theatre?

Question 5

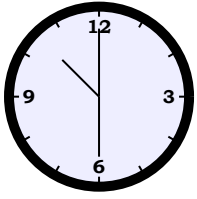
The movie theatre was open for 2 hours 30 minutes until it was closed at



am . When was it opened?

Question 6

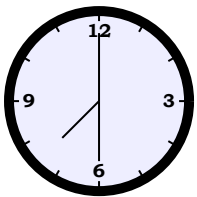
The boys did not want to go to bed. Mrs. Evans finally got them into bed at



am , which is 30 minutes later than their usual bedtime. When is their usual bedtime?

Question 7

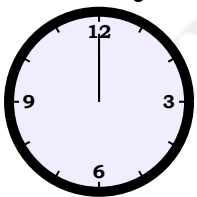
Customers came to the tailor's store to place orders for their uniforms. The tailor took 30 minutes to get all their body measurements. If the tailor finished measuring at



am , at what time did the tailor start measuring?

Question 8

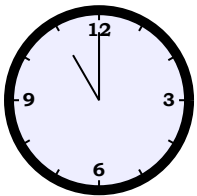
The morning announcements at Clara's school start at



pm . Clara arrives 2 hours 30 minutes before the announcements to prepare her lessons. When does she arrive at school?

Question 9

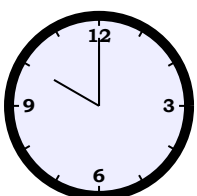
Ruby's co-worker arrived at



am , which is 3 hours later than usual. What time was Ruby's co-worker supposed to arrive?

Question 10

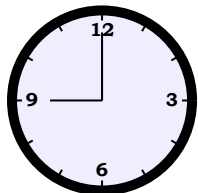
The fair closes at



pm and the ticketing office stops selling tickets 30 minutes before the fair closes. At what time does the ticketing office stop selling tickets?

Question 11

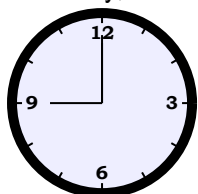
On Thursday, Alice woke up at



pm, which is 1 hour 30 minutes later than usual. When does Alice usually get up?

Question 12

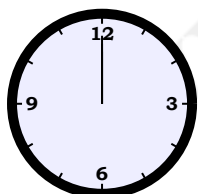
On Friday, Sam spent 2 hours playing video games; he stopped at



pm. When did Sam start to play?

Question 13

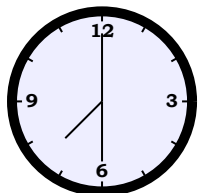
Ernest took out a pie from the freezer and thawed it for 1 hour 30 minutes. If the pie became ready for cooking at



am the next day, at what time did he take out the pie?

Question 14

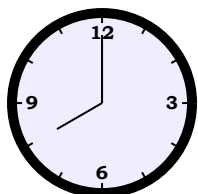
Kevin drove his delivery truck from the warehouse and arrived at the super-market at



pm after 1 hour 30 minutes. At what time did he leave the warehouse?

Question 15

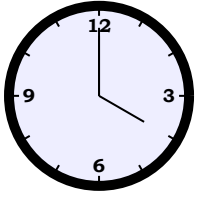
John delivered 73 boxes of grapefruits to a restaurant 30 minutes before



pm. At what time did he start delivering?

Question 16

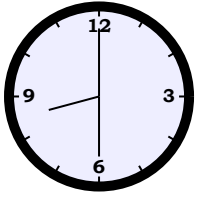
Judith needed to arrive at the school 30 minutes earlier than the start of the exam. If the exam starts at



pm, when did Judith need to arrive at the school?

Question 17

Before cleaning, Alice's mother baked pie for 1 hour 30 minutes. If Alice's mother finished cooking at



pm, what time did she start cooking?

Answer Keys for Time and Clock (Half Hour) Word Problems Grade Two Part 2

Question 1: 11:00am
Question 2: 06:00am
Question 3: 06:30am
Question 4: 11:00am
Question 5: 06:30am
Question 6: 10:00am
Question 7: 07:00am
Question 8: 09:30am
Question 9: 08:00am
Question 10: 09:30pm
Question 11: 07:30pm
Question 12: 07:00pm
Question 13: 10:30pm
Question 14: 06:00pm
Question 15: 07:30pm
Question 16: 03:30pm
Question 17: 07:00pm