
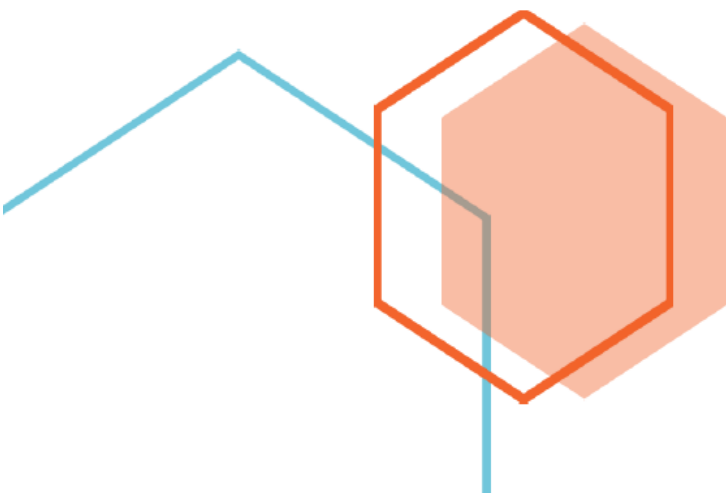


First Edition

# Time and Clock (Half Hour) Word Problems Grade Two Part 4



*Fun and challenging math questions for young students*



# Time and Clock (Half Hour) Word Problems Grade Two Part 4

Thank you for purchasing **MathJump! Like a Kangaroo**. Please register online: <https://www.homesweetlearning.com/app/home?fr=ebk> where we have a much larger collection of practice questions with similar levels of difficulty as other math contest problems such as Math Kangaroo, MathCounts, etc. You will also get notification whenever new questions are created.

There is also the **MathJump! Weekly Quiz** - an online math quiz held weekly for students of grades 1-4. The difficulty level of the weekly quiz questions are equivalent to Part B and Part C questions in the annual Math Kangaroo contest. Participating in MathJump! Weekly Quiz will help the parents track their child's progress with the score report and performance ranking, and will help students get better scores for different math contests.

Or you can get individualized help from our math tutors. **MathJump! Like a Kangaroo Intensive Test Prep** is an intensive teacher-led group or one-on-one training program to prepare students for taking math contests. The one-on-one option of this class has flexible schedule and content as requested by the students; the group class consists of 2-5 students (maximum 5 students) and meets once a week at a fixed time. Taking this class will improve the students' problem solving skills as well as knowledge in basic math concepts such as number sense, numeration, measurement, geometry, spatial sense, patterning, algebra, data management, probability, etc.

Please note that we are not affiliated with the Math Kangaroo Contest organizers. But doing our practice questions, taking our weekly quizzes, or taking lessons from our tutors will definitely help your child get better scores in Math Kangaroo Contest and other math contests.

Homesweet Learning Math Program Team



FUN  
CHALLENGING  
MATH  
PROBLEMS  
FOR  
YOUNG  
LEARNERS

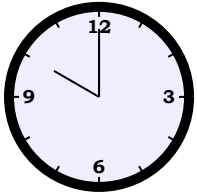
## Time and Clock (Half Hour) Word Problems Grade Two Part 4

### Question 1

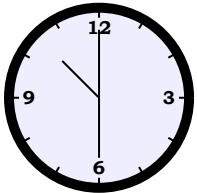
The bus ride usually takes 3 hours , but there was a 2 hours 30 minutes delay. How long did it take the riders including waiting time?

### Question 2

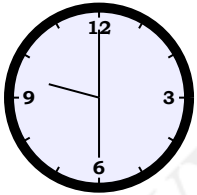
Ruby went to the gym at



am . She did some workout for some time and left at



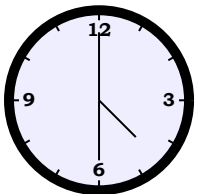
am . Bobby came at



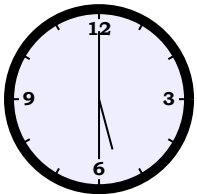
am . and stayed in the gym for the same number of minutes as Ruby. At what time did Bobby leave the gym?

### Question 3

Janet was supposed to meet her customer at



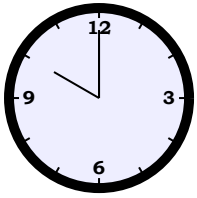
pm in the coffee store. The customer called her at



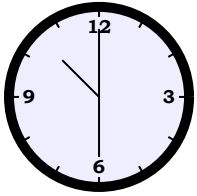
pm and said that she would be there in 1 hour . How late was the customer?

### Question 4

Paul and his brother watched a TV show from



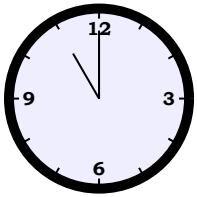
pm, which was 30 minutes after the show had started. The TV show ended at



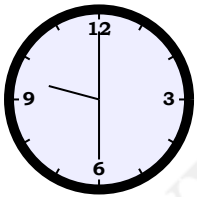
pm. How long was the show?

### Question 5

Mr. Williams usually leaves the office at



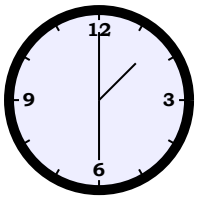
pm. However, on Tuesday, the last customer meeting he had was at



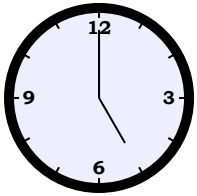
pm and it took 5 hours. Compared to the usual time, how much later did Mr. Williams leave the office?

### Question 6

Sam got to school at



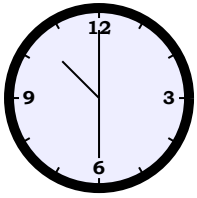
pm. As soon as he got to school, he started to take his exam. Sam handed in his exam paper 30 minutes before



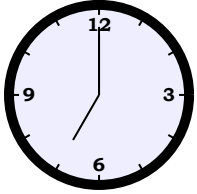
pm. How long did it take Sam to work on his exam?

### Question 7

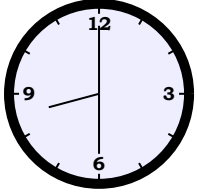
Louis came to work at



am . He usually gets off work at



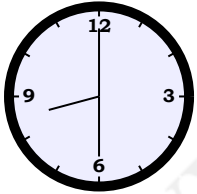
pm . Today, the manager asked Louis to stay until



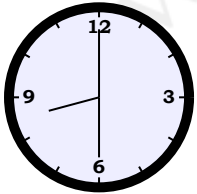
pm . How much longer is Louis's workday today?

### Question 8

A special tour was scheduled to start at



am but started 10 hours 30 minutes late. If the tour ended at



pm , how long did the tour last?

## Answer Keys for Time and Clock (Half Hour) Word Problems Grade Two Part 4

Question 1: 5 hours 30 minutes

Question 2: 10:00am

Question 3: 2 hours

Question 4: 1 hour

Question 5: 3 hours 30 minutes

Question 6: 3 hours

Question 7: 1 hour 30 minutes

Question 8: 1 hour 30 minutes