
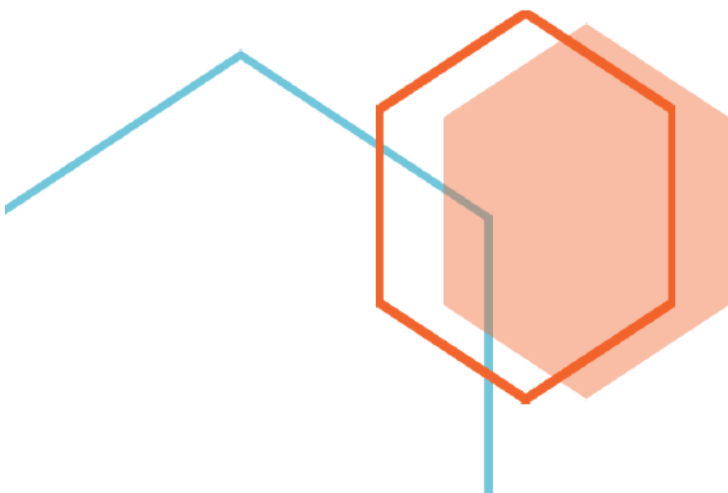


First Edition

Time and Clock Word Problems Grade Two Part 5



Fun and challenging math questions for young students



Time and Clock Word Problems Grade Two Part 5

Thank you for purchasing **MathJump! Like a Kangaroo**. Please register online: <https://www.homesweetlearning.com/app/home?fr=ebk> where we have a much larger collection of practice questions with similar levels of difficulty as other math contest problems such as Math Kangaroo, MathCounts, etc. You will also get notification whenever new questions are created.

There is also the **MathJump! Weekly Quiz** - an online math quiz held weekly for students of grades 1-4. The difficulty level of the weekly quiz questions are equivalent to Part B and Part C questions in the annual Math Kangaroo contest. Participating in MathJump! Weekly Quiz will help the parents track their child's progress with the score report and performance ranking, and will help students get better scores for different math contests.

Or you can get individualized help from our math tutors. **MathJump! Like a Kangaroo Intensive Test Prep** is an intensive teacher-led group or one-on-one training program to prepare students for taking math contests. The one-on-one option of this class has flexible schedule and content as requested by the students; the group class consists of 2-5 students (maximum 5 students) and meets once a week at a fixed time. Taking this class will improve the students' problem solving skills as well as knowledge in basic math concepts such as number sense, numeration, measurement, geometry, spatial sense, patterning, algebra, data management, probability, etc.

Please note that we are not affiliated with the Math Kangaroo Contest organizers. But doing our practice questions, taking our weekly quizzes, or taking lessons from our tutors will definitely help your child get better scores in Math Kangaroo Contest and other math contests.

Homesweet Learning Math Program Team



FUN
CHALLENGING
MATH
PROBLEMS
FOR
YOUNG
LEARNERS

Time and Clock Word Problems Grade Two Part 5

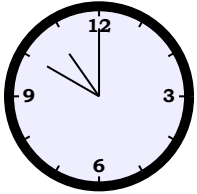
Question 1

The lecture usually takes 3 hours , but there was a 2 hours 5 minutes delay. How long was the lecture including waiting time?

- A: 5 hours 5 minutes B: 18 hours 20 minutes C: 12 hours 10 minutes D: 22 hours 26 minutes E: 23 hours 56 minutes

Question 2

The tourists stayed for 2 hours 5 minutes in the museum and 20 minutes in the restaurant. If they left the restaurant at

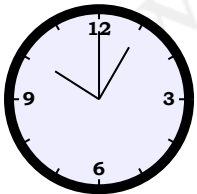


am , what time did they go to the museum?

- A: 10:00am the next day B: 03:00pm the previous day C: 00:35am the next day D: 08:25am E: 02:15pm the previous day

Question 3

The BBQ ribs must be marinated first for 3 hours . Then, it usually takes 1 hour 15 minutes to roast the ribs before it is served. If dinner needs to be served at

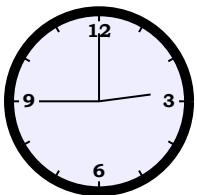


am , at what time should the ribs start marinating before it is served?

- A: 05:50am B: 09:20am the next day C: 08:40pm the previous day D: 01:25pm the next day E: 10:00am

Question 4

The movie theatre opens at

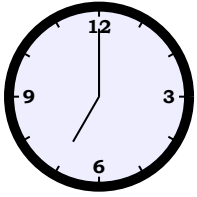


pm . Sam arrived 2 hours 35 minutes before the movie theatre opens, and Betty arrived 1 hour 15 minutes before Sam arrived. When did Betty arrive at the movie theatre?

- A: 08:40am the next day B: 06:25am the previous day C: 10:20pm D: 10:55am E: 09:40pm the next day

Question 5

Today, Alice started her 1 hour 5 minutes lunch break 40 minutes late because of an appointment. She finished her lunch break at

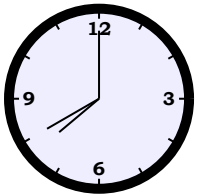


am . When did she usually start her lunch break?

- A: 00:20am B: 09:20pm C: 05:15am D: 01:35pm the next day E: 01:45pm the next day

Question 6

The magic show was delayed for 5 minutes. The magic show lasted for 2 hours 15 minutes and ended at

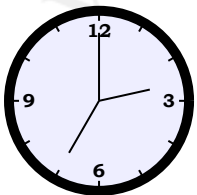


am . When was the magic show's original start time?

- A: 10:40pm the previous day B: 03:40am the previous day C: 05:20am D: 04:00am the next day E: 12:10pm

Question 7

The exam ended at

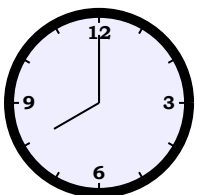


pm , and was 1 hour 20 minutes long. If there was also a 2 hours 25 minutes break, when did the exam start?

- A: 11:25pm the previous day B: 02:45am the next day C: 06:30am the previous day D: 10:50am E: 09:30pm the next day

Question 8

The auction was delayed for 2 hours 30 minutes. The auction lasted for 30 minutes and ended at

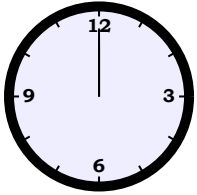


am . When was the auction's original start time?

A: 02:15am B: 08:10pm the previous day C: 06:50am D: 02:10am the previous day E: 05:00am

Question 9

The exam ended at



pm, and was 1 hour 30 minutes long. If there was also a 3 hours break, when did the exam start?

A: 04:30pm the previous day B: 07:30am C: 07:50pm D: 04:55pm the next day E: 01:10pm the previous day

Answer Keys for Time and Clock Word Problems Grade Two Part 5

- Question 1: A
- Question 2: D
- Question 3: A
- Question 4: D
- Question 5: C
- Question 6: C
- Question 7: D
- Question 8: E
- Question 9: B