


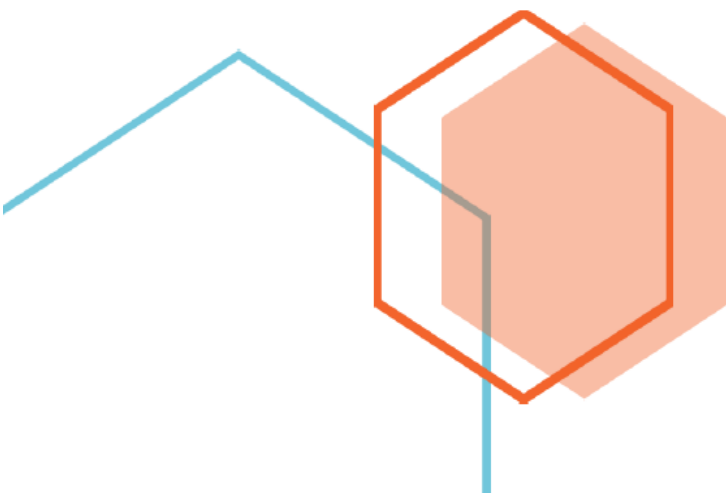


First Edition

# Time and Clock (Whole Hour) Word Problems Grade One Part 1

---

*Fun and challenging math questions for young students*



# Time and Clock (Whole Hour) Word Problems Grade One Part 1

Thank you for purchasing **MathJump! Like a Kangaroo**. Please register online: <https://www.homesweetlearning.com/app/home?fr=ebk> where we have a much larger collection of practice questions with similar levels of difficulty as other math contest problems such as Math Kangaroo, MathCounts, etc. You will also get notification whenever new questions are created.

There is also the **MathJump! Weekly Quiz** - an online math quiz held weekly for students of grades 1-4. The difficulty level of the weekly quiz questions are equivalent to Part B and Part C questions in the annual Math Kangaroo contest. Participating in MathJump! Weekly Quiz will help the parents track their child's progress with the score report and performance ranking, and will help students get better scores for different math contests.

Or you can get individualized help from our math tutors. **MathJump! Like a Kangaroo Intensive Test Prep** is an intensive teacher-led group or one-on-one training program to prepare students for taking math contests. The one-on-one option of this class has flexible schedule and content as requested by the students; the group class consists of 2-5 students (maximum 5 students) and meets once a week at a fixed time. Taking this class will improve the students' problem solving skills as well as knowledge in basic math concepts such as number sense, numeration, measurement, geometry, spatial sense, patterning, algebra, data management, probability, etc.

Please note that we are not affiliated with the Math Kangaroo Contest organizers. But doing our practice questions, taking our weekly quizzes, or taking lessons from our tutors will definitely help your child get better scores in Math Kangaroo Contest and other math contests.

Homesweet Learning Math Program Team

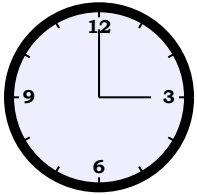


FUN  
CHALLENGING  
MATH  
PROBLEMS  
FOR  
YOUNG  
LEARNERS

# Time and Clock (Whole Hour) Word Problems Grade One Part 1

## Question 1

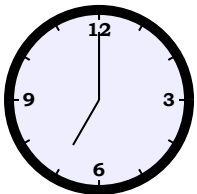
School ends at



pm . The school allows another 3 hours for cleaning the facilities before it closes. When does the school close?

## Question 2

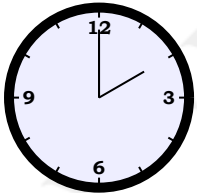
It usually takes 5 hours to grill a steak before it is served to the customer. If a customer orders a steak at



pm , when can the customer expect to receive the order?

## Question 3

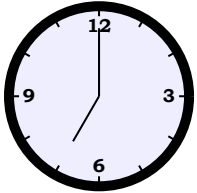
John starts his work at



pm . He stays at work for 1 hour . When will John leave?

## Question 4

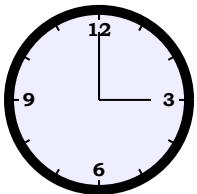
The dolphins do performances every 5 hours . They did one show at



pm . At what time is the next dolphin show?

## Question 5

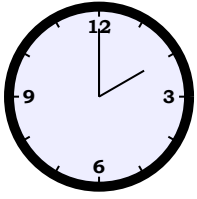
Children can pat dolphin at the dolphin exhibit every Saturday at



pm in the zoo. The patting session will usually last for 5 hours . When is the patting session finished?

### Question 6

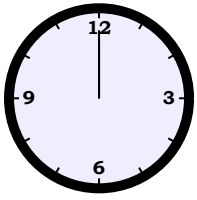
On Thursday, Ruby used 4 hours to clean her room starting from



pm . When was Ruby done cleaning up her room?

### Question 7

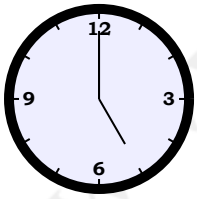
Today, Ruby woke up 3 hours later than usual. She usually wakes up at



pm in the morning. What time did she wake up today?

### Question 8

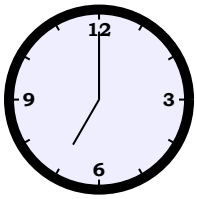
Allen finished his homework 2 hours later than usual. He usually finishes his homework at



am . What time did he finish his homework today?

### Question 9

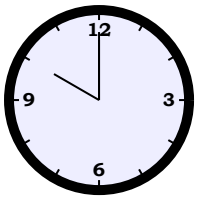
The Jones family arrived at the farm at



am . They got their tools right after arriving at the farm. After 5 hours , they started plowing the soil. What time did they start plowing the soil?

### Question 10

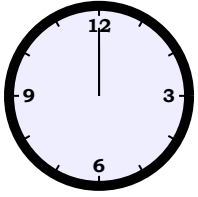
Buses came to the station every 1 hour . The first bus arrived at



am . At what time will the next bus arrive?

### Question 11

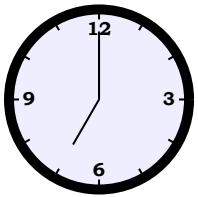
A birthday party of 3 hours started at



pm . At what time did the birthday party end?

### Question 12

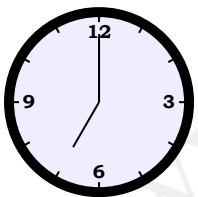
After the birthday party closed at



am , Amanda stayed behind to clean up. It took her 3 hours to clean up. When did Amanda leave?

### Question 13

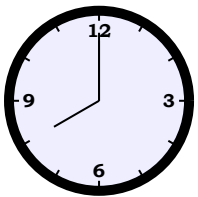
Mrs. Davies called at



am and said she could not come back home until 4 hours later. When would (Mrs.) Davies be back?

### Question 14

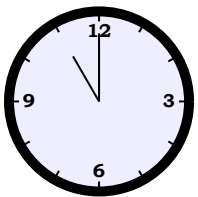
It took Louis 3 hours to get his home from Mrs. Cooper's home. He left Mrs. Cooper's home at



am . At what time did Louis get home?

### Question 15

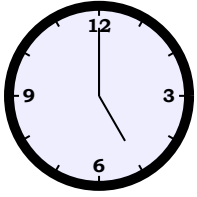
Customers came to the tailor's store to place orders for their uniforms. The tailor started measuring at



am and took 2 hours to get all their body measurements. When did the tailor finish measuring?

### Question 16

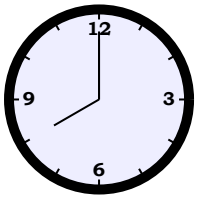
Bobby the tailor took 2 hours to complete making one shirt. If Bobby started sewing another shirt at



am , at what time would she finish that shirt?

### Question 17

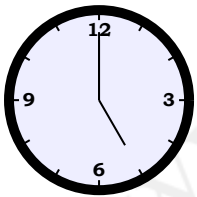
Each class is scheduled for 5 hours . If the first class starts at



am , what time would the second class start?

### Question 18

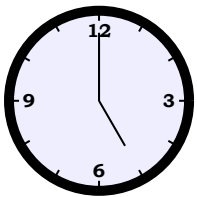
The museum opens at



am for 2 hours . When does the museum close?

### Question 19

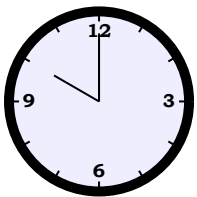
Brandon invited some guests to visit her new home. Her guests were at her house at



am and stayed for 2 hours . When did the guests leave?

### Question 20

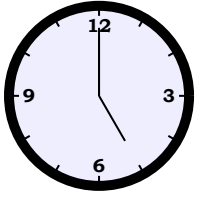
The workers took 3 hours to load all the fruits onto the truck. They started at



am , when did they finish the work?

### Question 21

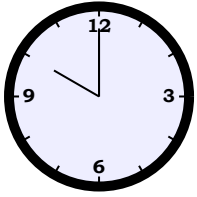
Kevin usually spends 4 hours to review his class notes to prepare for his final exam. If Kevin started reviewing at



am, when would he finish reviewing?

### Question 22

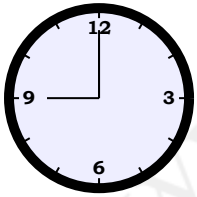
Nancy finished her exam 2 hours earlier than the scheduled end-time for the exam, which started at



am for 2 hours. When did Nancy finish the exam?

### Question 23

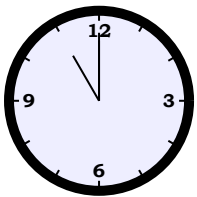
Ruby's sister spent 1 hour washing her clothes, starting at



am. When did she finish washing the clothes?

### Question 24

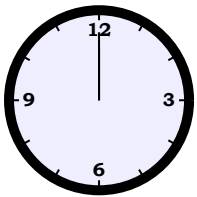
Amanda left school at



am. It took Amanda 1 hour to arrive at the theme park. The gatekeeper checked their tickets for 5 hours. At what time did Amanda come to the theme park?

### Question 25

Alice and her brother started cleaning their bedrooms at



pm. Alice took 3 hours to clean her room, and her brother took 1 hour. At what time did Alice's brother finish cleaning his room?

## Answer Keys for Time and Clock (Whole Hour) Word Problems Grade One Part 1

- Question 1: 06:00pm  
Question 2: 00:00am the next day  
Question 3: 03:00pm  
Question 4: 00:00am the next day  
Question 5: 08:00pm  
Question 6: 06:00pm  
Question 7: 03:00pm  
Question 8: 07:00am  
Question 9: 12:00pm  
Question 10: 11:00am  
Question 11: 03:00pm  
Question 12: 10:00am  
Question 13: 11:00am  
Question 14: 11:00am  
Question 15: 01:00pm  
Question 16: 07:00am  
Question 17: 01:00pm  
Question 18: 07:00am  
Question 19: 07:00am  
Question 20: 01:00pm  
Question 21: 09:00am  
Question 22: 12:00pm  
Question 23: 10:00am  
Question 24: 12:00pm  
Question 25: 01:00pm