


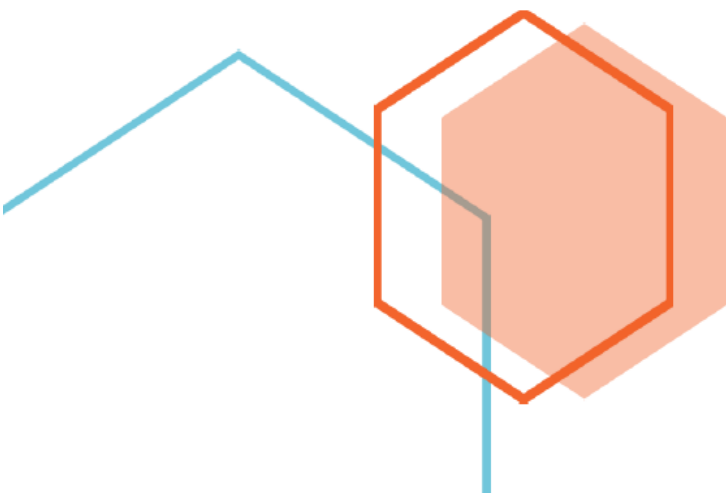
First Edition

Time and Clock (Whole Hour) Word Problems Grade One Part 2

Fun and challenging math questions for young students



Homesweet Learning Inc.



Time and Clock (Whole Hour) Word Problems Grade One Part 2

Thank you for purchasing **MathJump! Like a Kangaroo**. Please register online: <https://www.homesweetlearning.com/app/home?fr=ebk> where we have a much larger collection of practice questions with similar levels of difficulty as other math contest problems such as Math Kangaroo, MathCounts, etc. You will also get notification whenever new questions are created.

There is also the **MathJump! Weekly Quiz** - an online math quiz held weekly for students of grades 1-4. The difficulty level of the weekly quiz questions are equivalent to Part B and Part C questions in the annual Math Kangaroo contest. Participating in MathJump! Weekly Quiz will help the parents track their child's progress with the score report and performance ranking, and will help students get better scores for different math contests.

Or you can get individualized help from our math tutors. **MathJump! Like a Kangaroo Intensive Test Prep** is an intensive teacher-led group or one-on-one training program to prepare students for taking math contests. The one-on-one option of this class has flexible schedule and content as requested by the students; the group class consists of 2-5 students (maximum 5 students) and meets once a week at a fixed time. Taking this class will improve the students' problem solving skills as well as knowledge in basic math concepts such as number sense, numeration, measurement, geometry, spatial sense, patterning, algebra, data management, probability, etc.

Please note that we are not affiliated with the Math Kangaroo Contest organizers. But doing our practice questions, taking our weekly quizzes, or taking lessons from our tutors will definitely help your child get better scores in Math Kangaroo Contest and other math contests.

Homesweet Learning Math Program Team

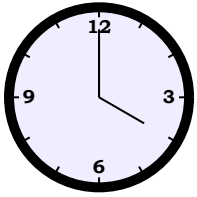


FUN
CHALLENGING
MATH
PROBLEMS
FOR
YOUNG
LEARNERS

Time and Clock (Whole Hour) Word Problems Grade One Part 2

Question 1

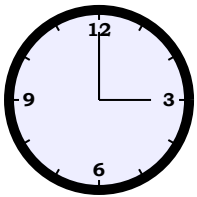
Today, Allen woke up 5 hours earlier than usual. He usually wakes up at



pm in the morning. What time did he wake up today?

Question 2

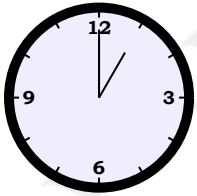
Bobby finished her homework 5 hours earlier than usual. She usually finishes her homework at



pm . What time did she finish her homework today?

Question 3

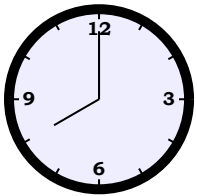
A ship arrived at the harbor at



pm after a delay of 3 hours . When did the ship leave?

Question 4

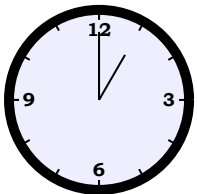
Paul went to the office. He arrived 1 hour before the office was scheduled to open at



am . When did Paul arrive at the office?

Question 5

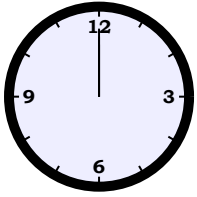
The office was open for 4 hours until it was closed at



pm . When was it opened?

Question 6

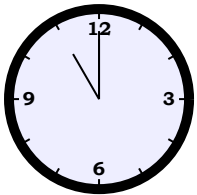
The kids did not want to go to bed. Mrs. White finally got them into bed at



pm , which is 4 hours later than their usual bedtime. When is their usual bedtime?

Question 7

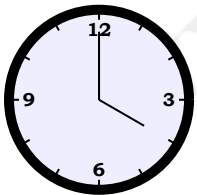
Customers came to the tailor's store to place orders for their uniforms. The tailor took 4 hours to get all their body measurements. If the tailor finished measuring at



am , at what time did the tailor start measuring?

Question 8

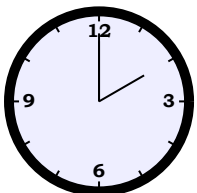
The morning announcements at Brandon's school start at



pm . Brandon arrives 5 hours before the announcements to prepare her lessons. When does she arrive at school?

Question 9

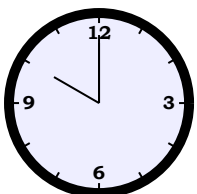
Ernest's co-worker arrived at



pm , which is 5 hours later than usual. What time was Ernest's co-worker supposed to arrive?

Question 10

The movie theatre closes at

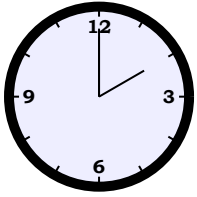


pm and the ticketing office stops selling tickets 4 hours before the movie theatre closes. At what time does the ticketing

office stop selling tickets?

Question 11

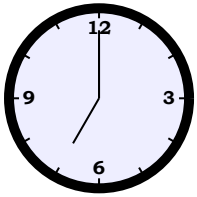
On Wednesday, Paul woke up at



am the next day, which is 3 hours later than usual. When does Paul usually gets up?

Question 12

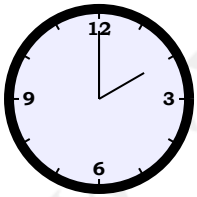
On Saturday, Ernest spent 2 hours playing video games; he stopped at



pm . When did Ernest start to play?

Question 13

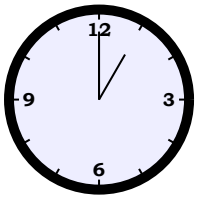
Brandon took out a pie from the freezer and thawed it for 4 hours . If the pie became ready for cooking at



am the next day, at what time did she take out the pie?

Question 14

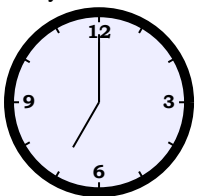
Betty drove her delivery truck from the warehouse and arrived at the super-market at



am the next day after 3 hours . At what time did she leave the warehouse?

Question 15

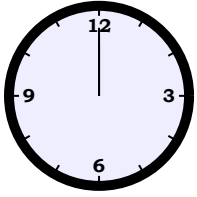
Ruby delivered 59 boxes of grapefruits to a restaurant 2 hours before



pm . At what time did he started delivering?

Question 16

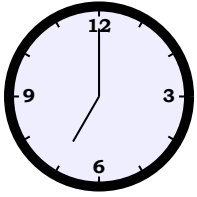
Alice needed to arrive at the school 4 hours earlier than the start of the exam. If the exam starts at



am the next day, when did Alice need to arrive at the school?

Question 17

Before cleaning, Louis's mother baked pie for 2 hours . If Louis's mother finished cooking at



pm , what time did she start cooking?

Answer Keys for Time and Clock (Whole Hour) Word Problems Grade One Part 2

Question 1: 11:00am
Question 2: 10:00am
Question 3: 10:00am
Question 4: 07:00am
Question 5: 09:00am
Question 6: 08:00am
Question 7: 07:00am
Question 8: 11:00am
Question 9: 09:00am
Question 10: 06:00pm
Question 11: 11:00pm
Question 12: 05:00pm
Question 13: 10:00pm
Question 14: 10:00pm
Question 15: 05:00pm
Question 16: 08:00pm
Question 17: 05:00pm