
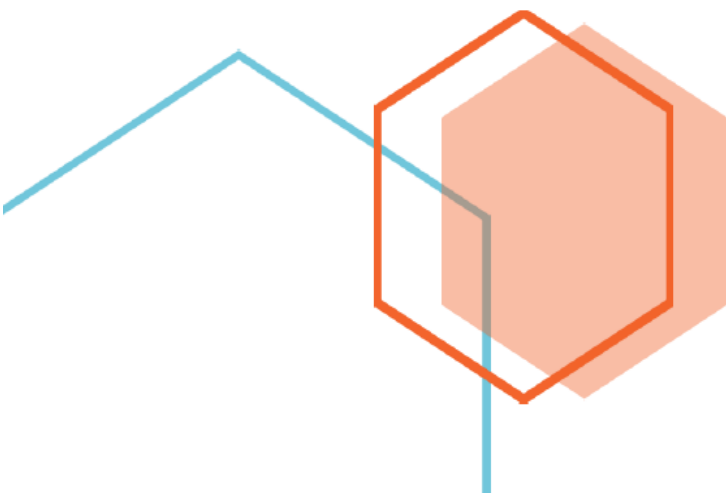




First Edition

Time and Clock (Whole Hour) Word Problems Grade One Part 3

Fun and challenging math questions for young students



Time and Clock (Whole Hour) Word Problems Grade One Part 3

Thank you for purchasing **MathJump! Like a Kangaroo**. Please register online: <https://www.homesweetlearning.com/app/home?fr=ebk> where we have a much larger collection of practice questions with similar levels of difficulty as other math contest problems such as Math Kangaroo, MathCounts, etc. You will also get notification whenever new questions are created.

There is also the **MathJump! Weekly Quiz** - an online math quiz held weekly for students of grades 1-4. The difficulty level of the weekly quiz questions are equivalent to Part B and Part C questions in the annual Math Kangaroo contest. Participating in MathJump! Weekly Quiz will help the parents track their child's progress with the score report and performance ranking, and will help students get better scores for different math contests.

Or you can get individualized help from our math tutors. **MathJump! Like a Kangaroo Intensive Test Prep** is an intensive teacher-led group or one-on-one training program to prepare students for taking math contests. The one-on-one option of this class has flexible schedule and content as requested by the students; the group class consists of 2-5 students (maximum 5 students) and meets once a week at a fixed time. Taking this class will improve the students' problem solving skills as well as knowledge in basic math concepts such as number sense, numeration, measurement, geometry, spatial sense, patterning, algebra, data management, probability, etc.

Please note that we are not affiliated with the Math Kangaroo Contest organizers. But doing our practice questions, taking our weekly quizzes, or taking lessons from our tutors will definitely help your child get better scores in Math Kangaroo Contest and other math contests.

Homesweet Learning Math Program Team

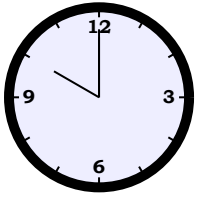


FUN
CHALLENGING
MATH
PROBLEMS
FOR
YOUNG
LEARNERS

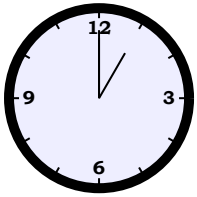
Time and Clock (Whole Hour) Word Problems Grade One Part 3

Question 1

The Patel family started working at



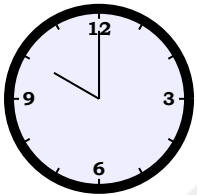
am and took their break at



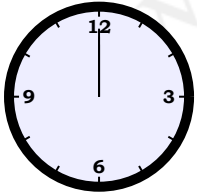
pm . How many hours did they work before their break?

Question 2

A plane was scheduled to arrive at the airport at



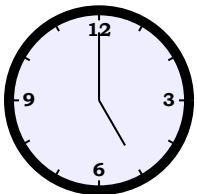
am , but it was delayed until



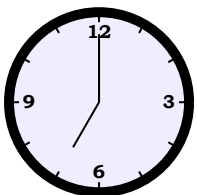
pm . How long was the delay?

Question 3

A freight train stopped at the station at



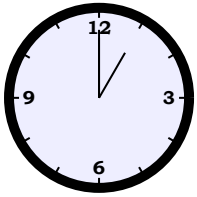
am to load more goods. It then left the station at



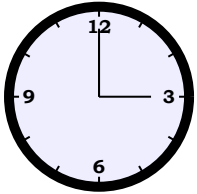
am . How long did it stop?

Question 4

The school was open from



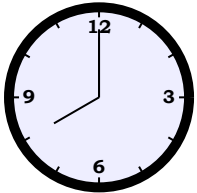
pm until



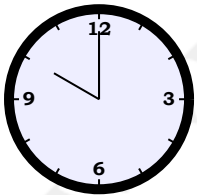
pm . How long was the school open?

Question 5

Alice started babysitting Mrs. Taylor' twin boys at



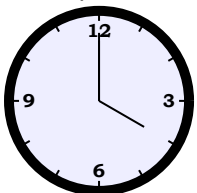
pm . Mrs. Taylor came home at




pm . How long did Alice babysit for?

Question 6

The super market is open from



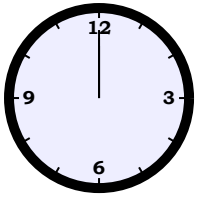
pm until



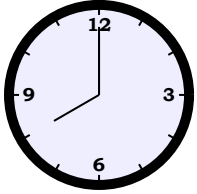
pm . How long is the super market open?

Question 7

The first class at the school started at



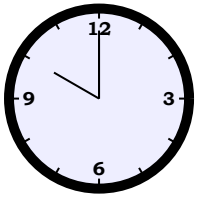
pm . Allen arrived at



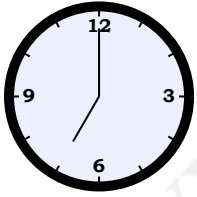
pm due to unexpected traffic. How late was Allen for his first class?

Question 8

On Wednesday, Jessica went to a movie with her friends. The movie started at



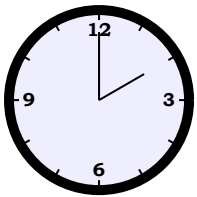
pm and ended at



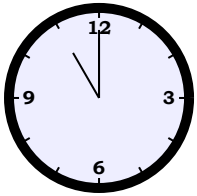
am the next day. How long was the movie?

Question 9

Adrian started working on his school project at



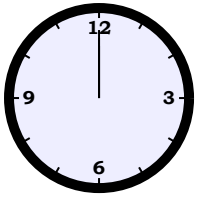
pm . He was not done until



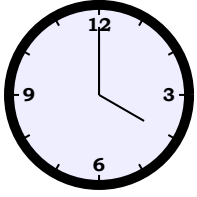
pm . How much time did Adrian spend working on the school project?

Question 10

Judith finished her lunch early at



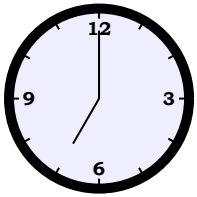
pm . If Judith's next class was scheduled to start at



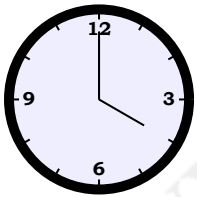
pm , how early was Judith for her next class?

Question 11

The museum opens from



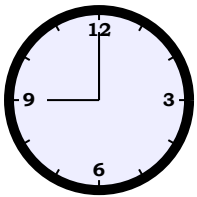
am to



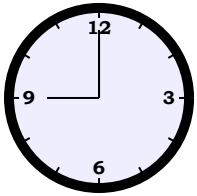
pm . How long is the museum open?

Question 12

Clara started baking the turkey at



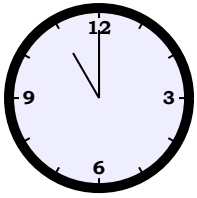
am and it was not done until



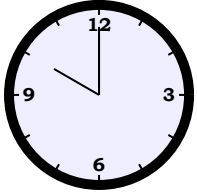
pm . How long did it take to bake the turkey?

Question 13

The delivery truck was scheduled to arrive at the supermarket at



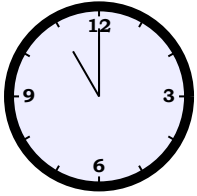
am , but it was delayed until



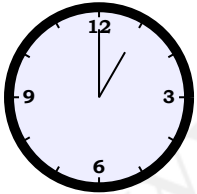
pm . How late was the delivery truck?

Question 14

Judith the truck driver drove her truck from



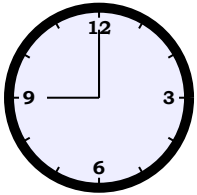
am and stopped for her lunch at



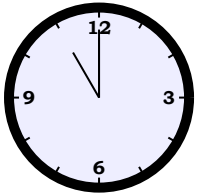
pm . How many hours did she spend driving the truck?

Question 15

Adrian's father was doing a deep cleaning of their car. He started at



am and finished at



am . How long did Adrian's father clean the car?

Answer Keys for Time and Clock (Whole Hour) Word Problems Grade One Part 3

- Question 1: 3 hours
- Question 2: 2 hours
- Question 3: 2 hours
- Question 4: 2 hours
- Question 5: 2 hours
- Question 6: 6 hours
- Question 7: 8 hours
- Question 8: 9 hours
- Question 9: 9 hours
- Question 10: 4 hours
- Question 11: 9 hours
- Question 12: 12 hours
- Question 13: 11 hours
- Question 14: 2 hours
- Question 15: 2 hours